

1. Rechne die kleine Aufgabe zuerst.

$13 + 2 = 15$

$17 - 3 = 14$

$12 + 4 = 16$

$18 - 7 = 11$

$3 + 2 = 5$

$7 - 3 = 4$

$2 + 4 = 6$

$8 - 7 = 1$

2. Rechne.

+	2	3
2	4	5
12	14	15

+	1	2
5	6	7
15	16	17

-	4	5
9	5	4
19	15	14

-	5	6
7	2	1
17	12	11

3. Finde die Nachbaraufgaben. Rechne.

$11 + 2 = 13$	$12 + 1 = 13$
$12 + 2 = 14$	$12 + 2 = 14$
$13 + 2 = 15$	$12 + 3 = 15$

$15 - 4 = 11$	$16 - 3 = 13$
$16 - 4 = 12$	$16 - 4 = 12$
$17 - 4 = 13$	$16 - 5 = 11$

4. Wie viel ist es? Trage ein.



8 ct

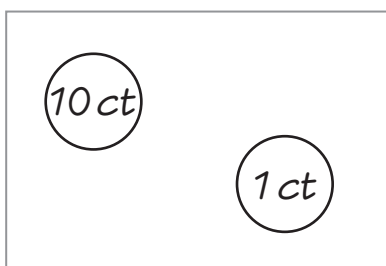


13 ct

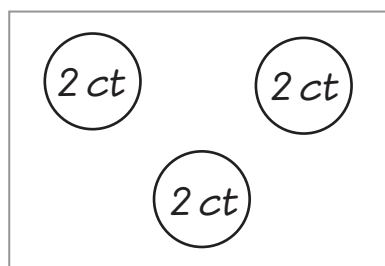


7 €

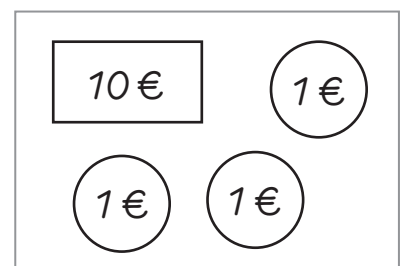
5. Trage ein.



11 ct



6 ct



13 €

1. Rechne die kleine Aufgabe zuerst.

$18 + 1 = 19$

$15 - 3 = 12$

$14 + 5 = 19$

$17 - 2 = 15$

$8 + 1 = 9$

$5 - 3 = 2$

$4 + 5 = 9$

$7 - 2 = 5$

2. Rechne.

+	1	2
3	4	5
13	14	15

+	3	4
1	4	5
11	14	15

-	2	3
6	4	3
16	14	13

-	5	6
9	4	3
19	14	13

3. Finde die Nachbaraufgaben. Rechne.

$11 + 6 = 17$	$12 + 5 = 17$
$12 + 6 = 18$	$12 + 6 = 18$
$13 + 6 = 19$	$12 + 7 = 19$

$17 - 3 = 14$	$18 - 2 = 16$
$18 - 3 = 15$	$18 - 3 = 15$
$19 - 3 = 16$	$18 - 4 = 14$

4. Wie viel ist es? Trage ein.



5 ct

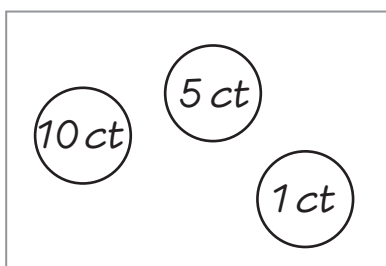


16 ct

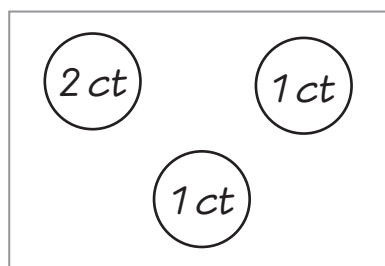


14 €

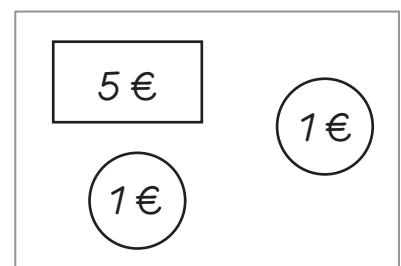
5. Trage ein.



16 ct



4 ct



7 €

1. Rechne die kleine Aufgabe zuerst.

$16 + 2 = 18$

$13 - 1 = 12$

$12 + 7 = 19$

$14 - 2 = 12$

$6 + 2 = 8$

$3 - 1 = 2$

$2 + 7 = 9$

$4 - 2 = 2$

2. Rechne.

+	1	2
7	8	9
17	18	19

+	3	4
6	9	10
16	19	20

-	1	2
5	6	7
15	16	17

-	3	4
9	6	5
19	16	15

3. Finde die Nachbaraufgaben. Rechne.

$10 + 5 = 15$	$11 + 4 = 15$
$11 + 5 = 16$	$11 + 5 = 16$
$12 + 5 = 17$	$11 + 6 = 17$

$17 - 6 = 11$	$18 - 5 = 13$
$18 - 6 = 12$	$18 - 6 = 12$
$19 - 6 = 13$	$18 - 7 = 11$

4. Wie viel ist es? Trage ein.



8 ct

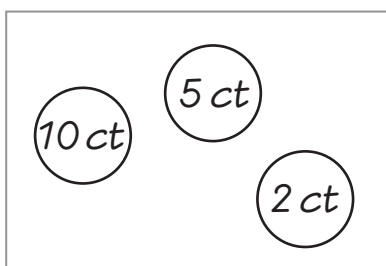


13 ct

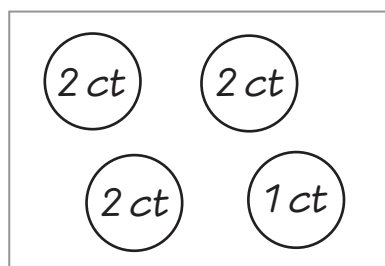


16 €

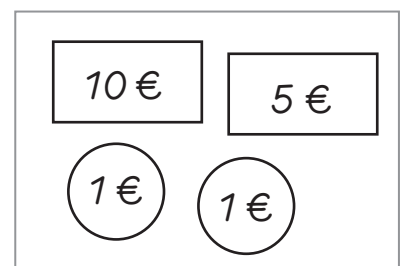
5. Trage ein.



17 ct



7 ct



17 €