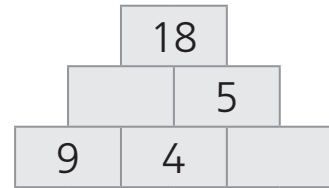
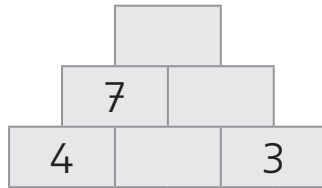
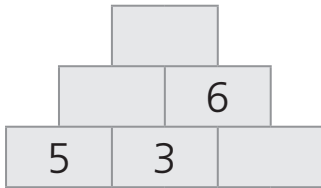


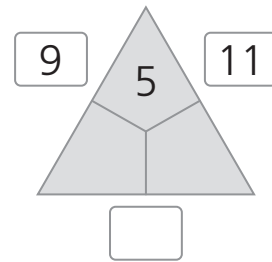
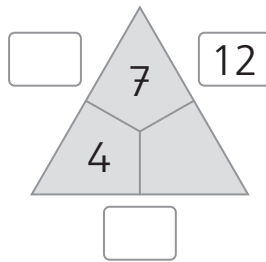
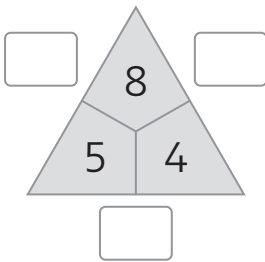
1. Rechne.

$2 + 9 = \square$	$18 - 9 = \square$	$17 - 9 = \square$	$8 + 6 = \square$
$11 - 5 = \square$	$5 + 9 = \square$	$3 + 9 = \square$	$13 - 4 = \square$
$9 + 3 = \square$	$14 - 7 = \square$	$15 - 9 = \square$	$9 + 8 = \square$

2: Rechne.



3. Rechne.



4. Male und rechne.

14 Kinder saßen auf einer Bank. 8 Kinder gehen weg.

Frage: Wie viele Kinder sitzen noch auf der Bank?

Rechnung:

Antwort: Es sitzen noch _____ Kinder auf der Bank.